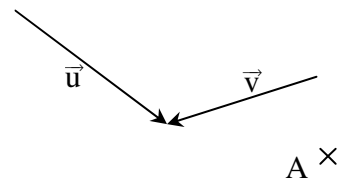
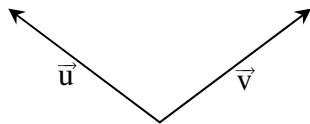
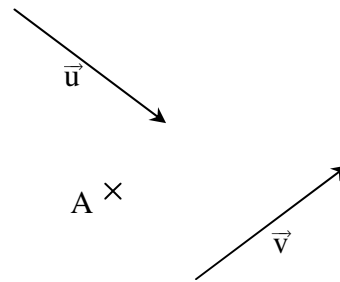
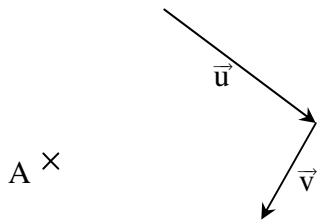
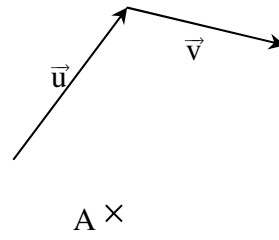
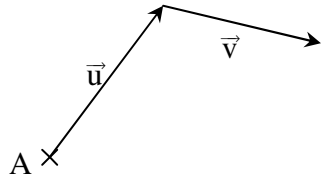


Exercice 2

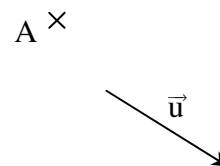
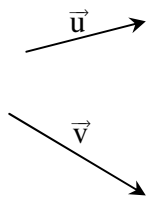
Même exercice que le précédent sans les quadrillages.



$A \times$

Exercice 3

Construire le vecteur d'origine A égal à $3\vec{u} + 2\vec{v}$



$A \times$